

Assessment Item – 07

Write the correct time in the box given below for the following clocks:-

$$6 \times 2 = 12$$



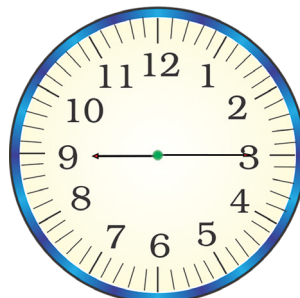
:



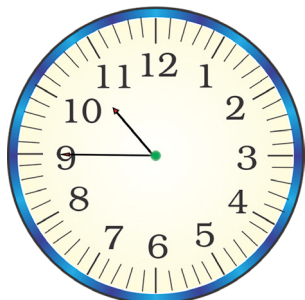
:




:



:



:



:

**Learning Outcome** – We learnt to tell and write the time shown by the clock.