




Worksheet 17**I. Add the following.**

 $1 + 9 = \underline{\quad}$

 $2 + 8 = \underline{\quad}$


 $3 + 7 = \underline{\quad}$


 $4 + 6 = \underline{\quad}$

 $5 + 5 = \underline{\quad}$

 $6 + 5 = \underline{\quad}$

 $9 + 2 = \underline{\quad}$

 $8 + 4 = \underline{\quad}$

 $9 + 3 = \underline{\quad}$

 $7 + 6 = \underline{\quad}$

We have learnt- Addition and subtraction of numbers up to 20