




Worksheet 18**I. Add the following.**


 $5 + 9 = \underline{\quad}$


 $6 + 8 = \underline{\quad}$


 $7 + 8 = \underline{\quad}$


 $9 + 6 = \underline{\quad}$


 $11 + 5 = \underline{\quad}$

 $12 + 5 = \underline{\quad}$

 $8 + 9 = \underline{\quad}$

 $9 + 9 = \underline{\quad}$

 $10 + 9 = \underline{\quad}$

 $10 + 10 = \underline{\quad}$

We have learnt- Addition and subtraction of numbers up to 20