






Worksheet 19**1. Subtract the following.**


 $11 - 1 = \underline{\quad}$


 $12 - 2 = \underline{\quad}$


 $13 - 1 = \underline{\quad}$


 $14 - 3 = \underline{\quad}$


 $15 - 2 = \underline{\quad}$

 $16 - 4 = \underline{\quad}$

 $19 - 4 = \underline{\quad}$

 $20 - 4 = \underline{\quad}$

 $20 - 3 = \underline{\quad}$

 $20 - 8 = \underline{\quad}$

We have learnt- Addition and subtraction of numbers up to 20