









Worksheet 37

Let's do addition and subtraction together.

1. Kamal bought a ball for ₹ 12 and a plastic bat for ₹ 35. How much money did he pay to the shopkeeper in total?

Cost of the ball is ₹ 12		
Cost of the bat is ₹ 35		
Total expenditure of Kamal (₹)	₹ _____	

2. Kamal had a total of ₹ 50 and he bought a bat for ₹ 35, so how much money is left with him now?

Kamal has a total of ₹ 50		
Cost of the bat is ₹ 35		
Kamal has left with (₹)	₹ _____	

We have learnt- Addition and Subtraction from 1 to 50