





## Worksheet 38

Let's do addition and subtraction together.

1. Vishal gave ₹ 21 to Vidhi and Mikka gave her ₹ 31, so how much money does Vidhi have now?

Vishal gave ₹ 21		
Mikka gave ₹ 31		
Vidhi has a total of Rs	₹ _____	

2. Kulwinder bought 50 chocolates to distribute in the class on the occasion of her birthday, out of which she distributed 38. How many chocolates does Kulwinder have now?

Kulwinder has total chocolates	50
Number of distributed chocolates	38
How many chocolates has she left with?	_____

**We have learnt-** Addition and Subtraction from 1 to 50