





Worksheet 39

Let's do addition and subtraction

1. When Shaan asked the price of half a kg of burfi and half a kg of rasgullas, the shopkeeper told him ₹ 60 for burfi and ₹ 35 for rasgullas. How much does Shaan have to pay in total?

Burfi	
Rasgullas	
Total expenditure of Shaan (₹)	₹ _____

2. Shan had ₹ 100 out of which he gave ₹ 60 to the shopkeeper for burfi, so how much money is left with him now?

Shaan has a total of Rs.		₹ 100
For burfi he paid Rs.		₹ 60
Amount left with Shaan (₹)	₹ _____	

We have learnt- Addition and Subtraction from 51 to 100