









Worksheet 40

Let's do addition and subtraction

1. Samar bought 1 dozen bananas and 1 kg of oranges from a fruit vendor. The fruit vendor asked for ₹45 for 1 dozen bananas and ₹55 for 1 kg of oranges. How much did Samar pay in total?

1 dozen Bananas		
1 kg Oranges		
Total expenditure of Samar		(₹) _____

2. Rashmi has a total of ₹90 from which she bought a train ticket from Delhi to Agra for ₹83. How much money is left with her?

Rashmi has a total of Rs			₹ 90
Train ticket fare			
Rashmi is left with Rs.	₹ _____		

We have learnt- Addition and Subtraction from 51 to 100