

Sample Items - Language

Read the given poster and answer the questions from 1 to 5.

Summer is one of the four major seasons in India. It usually starts in March and ends in June. During summer, it gets really hot.

You should...

- Take baths often
- Wear clothes made of cotton
- Wear light-coloured clothes
- Stay inside when it is too hot
- Drink lots of water
- Enjoy fresh fruits and vegetables
- Stop and rest if you get too warm

Have a great summer!

1. **How many major seasons does India have?**
 - A. One
 - B. Two
 - C. Three
 - D. Four

2. **According to the poster, what time of the year is usually summer?**
 - A. May to June
 - B. March to July
 - C. March to June
 - D. May to July

3. **Choose one thing you should do in summer.**
- A. Play outside in the sun
 - B. Drink lots of water
 - C. Eat unhealthy food
 - D. Avoid taking baths
4. **Who among the following does the wrong thing during summer?**
- A. Aman eats healthy food.
 - B. Anup stays at home when it is hot.
 - C. Pranav wears clothes made of wool.
 - D. Vivek drinks lots of water.
5. **When it is too hot, what is the best colour of clothes to wear?**
- A. Red
 - B. White
 - C. Black
 - D. Blue

Read the given passage and answer the questions from 6 to 10.

Mr. Prakash, the physical education teacher, gave important instructions for playing football safely. "Always share the ball with friends. Do not push anyone. Drink water and take a little rest if you feel tired. Stay in the playground area. Go back to the classes as soon as you hear the bell. If you see someone hurt, tell a teacher right away. Remember, playing is fun when everyone follows the rules and stays safe."

- 6. Who is Mr. Prakash?**
- A. A sports player
 - B. A yoga teacher
 - C. A physical education teacher
 - D. A history teacher
- 7. What were the instructions about?**
- A. Going to the classrooms
 - B. Having fun
 - C. Drinking water
 - D. Playing safely
- 8. Which instruction was NOT given?**
- A. Share the ball with friends
 - B. Turn around and pass the ball
 - C. Go to the class on hearing the bell
 - D. Follow the rules

9. **When were students asked to tell a teacher?**

- A. If someone hits them
- B. If someone makes fun of them
- C. If they see someone injured
- D. If someone needs help

10. **When is playing fun?**

- A. If everyone pushes each other
- B. If everyone is hurt
- C. If everyone shares the ball
- D. If everyone follows the rules

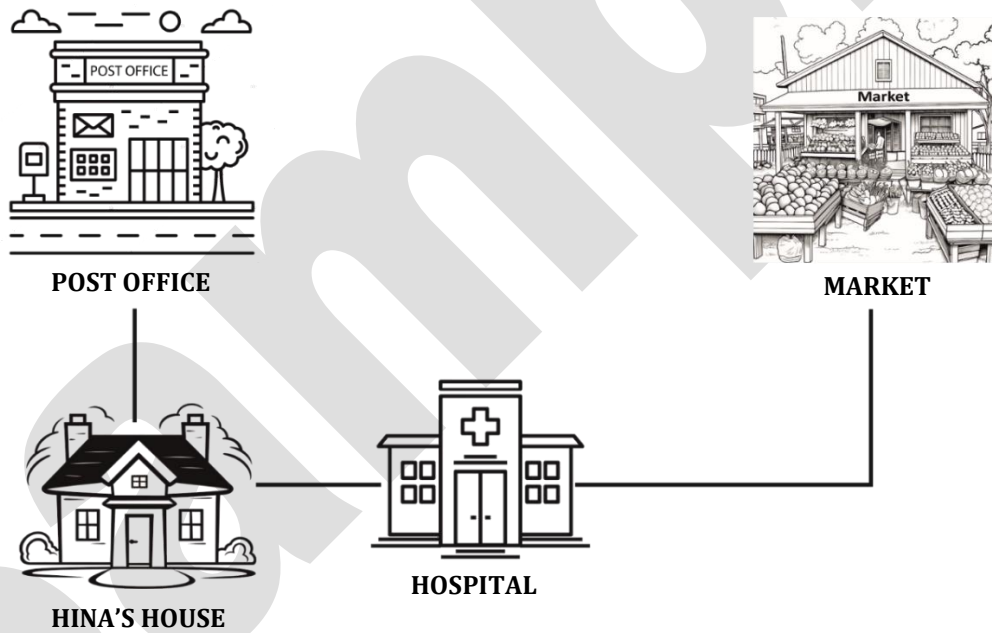
Sample Items - Mathematics

11. What is the correct number to fill in the blank given below?

6, 12, 18, _____, 30, 36

- A. 22
- B. 24
- C. 26
- D. 28

12. According to the map, where is Hina's house?



- A. West of the hospital.
- B. East of the market.
- C. North of the post office.
- D. South of the hospital.

13. A vendor has the following coins/notes.

What is the total amount he has?

Coins/Notes	₹2 coins	₹5 coin	₹20 note	₹50 note
Numbers	3	1	1	1

A. ₹ 77

B. ₹ 79

C. ₹ 89

D. ₹ 81

14. Pooja has 5 red pens and 2 green pens.

Which of the following friends have the same number of pens as Pooja?

Sahil has 7 red pens and 3 green pens.

Rahul has 8 red pens and 3 green pens.

Suvya has 7 red pens and 1 green pens.

Tiya has 3 red pens and 4 green pens.

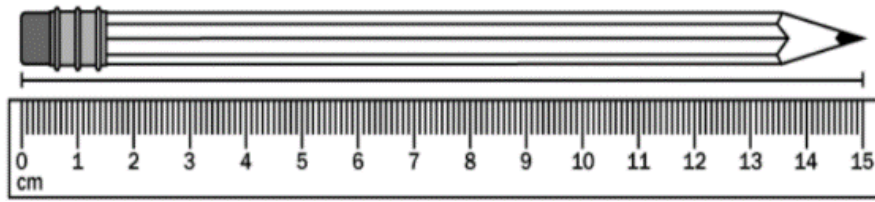
A. Sahil

B. Tiya

C. Suvya

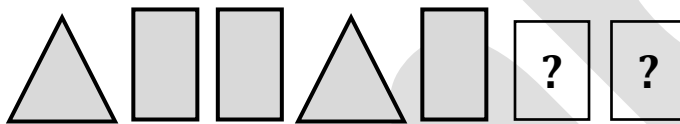
D. Rahul

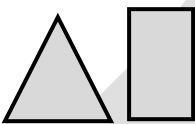
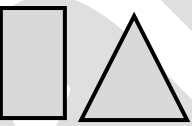
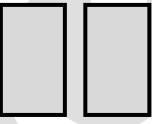
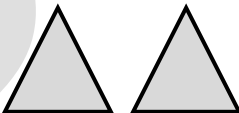
15. What is the length of the pencil?



- A. 11 cm
- B. 12 cm
- C. 14 cm
- D. 15 cm

16. Choose the option that completes the pattern.




- A. 
- B. 
- C. 
- D. 

17. Choose the option with the numbers arranged from largest to smallest.




- A. 91, 92, 93, 94, 95
B. 91, 93, 92, 94, 95
C. 95, 94, 93, 92, 91
D. 95, 93, 92, 94, 91
18. There are 32 balls in a room. These balls must be equally shared among 4 children. How many balls will each child get?
- A. 8
B. 7
C. 9
D. 6

19. Look at the picture. Which vegetable is the heaviest?




- A. Turnip
- B. Tomato
- C. Carrot
- D. Corn

20. Which of the clocks shows 7 o'clock?




A



B



C



D

- A. A
- B. B
- C. C
- D. D

Sample Items - TWAU

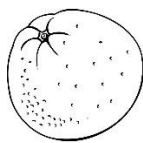
21. Choose the odd one out.



Banana



Apple



Orange



Spinach


- A. Banana
- B. Apple
- C. Orange
- D. Spinach

22. A student notices that whenever they water their plants regularly, the leaves appear healthier compared to plants that receive irregular watering.

What do you understand from this?

- A. Water helps to remove insects.
- B. Water provides more sunlight.
- C. Water washes away the soil.
- D. Water helps to absorb nutrients from the soil.

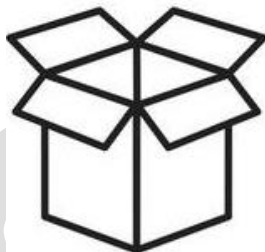
23. The shell of a tortoise has a unique shape. Which of the following shapes looks most like a tortoise's shell?



- A. Square
- B. Triangle
- C. Circle
- D. Oval

24. Which of the given objects does not have any corners?

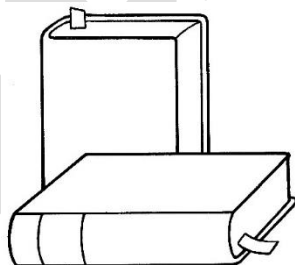
A.



B.



C.



D.



25. What does the given symbol represent?



- A. Air circulation
- B. Zebra Crossing
- C. No Parking
- D. Recyclable Material

26. If you see a picture of the sun and some clouds, what kind of weather might it represent?



- A. Rainy
- B. Sunny
- C. Partly cloudy
- D. Stormy

27. **Why should we recycle plastic bottles?**

- A. To change the shape of the bottles
- B. To reduce pollution
- C. To fill up the recycling bin
- D. To reduce the use of glass bottles

28. **You see a bird building a nest in a tree. Why do birds build nests?**



- A. To play with other birds
 - B. To keep their eggs safe
 - C. To help trees grow
 - D. To decorate trees
29. **Which two colours should you mix to make grey?**
- A. Purple and Orange
 - B. Black and White
 - C. Red and Blue
 - D. Yellow and White

30. Which of the following is the best device to store fruits and prevent them from rotting?

- A. Refrigerator**
- B. Washing machine**
- C. Television**
- D. Radio**